

### Labor Structures

I. Calculate the missing percentage in order to describe each region's labor structure.




Region	Percentage of Labor Force		
	Primary	Secondary	Tertiary
<i>Africa</i>		12%	19%
<i>Asia</i>		18%	22%
<i>Europe</i>	14%	36%	
<i>North America</i>		25%	71%
<i>South America</i>	39%		35%

II. Create a colored pie chart reflecting the breakdown for each region. Include a key.

Africa

Asia

Europe



North America

South America

